



STANDARD HIGH SCHOOL – ZZANA
LINKED SCHOOLS EXAMINATION PROGRAMME

PRE-PRIMARY LEAVING EXAMINATION 2016
SOCIAL STUDIES
2 HOURS 15 MINUTES

Index No.									
-----------	--	--	--	--	--	--	--	--	--

Candidate's Name:

Candidate's Signature:

School Name:

District :.....

FOR EXAMINER'S USE ONLY
--

Read the following instructions carefully:

1. This paper has **two** Section **A** and **B**.
2. Answer **all** questions. **All** answers to both Sections **A** and **B** must be written in the spaces provided.
3. **All** answers must be written using a blue or black ball-point pen or ink. Diagrams should be drawn in pencil.
4. **No** calculators are allowed in the examination room.
5. Unnecessary changes of work may lead to loss of marks.
6. Any handwriting that cannot easily be read may lead to loss of marks.
7. Do **not** fill anything in the boxes indicated **“For Examiners’ Use Only”** and those inside the question paper.

Qn. No.	Marks	Examiner's No.
1 – 10		
11 – 19		
20 – 30		
31 – 37		
38 – 40		
41 – 42		
43 – 44		
45 – 46		
47– 49		
50– 51		
52		
53		
54-55		
TOTAL		

Turn Over

SECTION A

1. What social service is provided by drivers in the community?

2. Which country in East Africa was the last to gain independence?

3. Mention any **one** effect of child abuse in Uganda today.

4. Why is a key important on a map?

5. Mention any **one** way in which altitude affects the climate of an area.

6. Give any **one** reason why trees in the Equatorial regions are tall?


7. Apart from water, name **one** other important natural resource.

8. What title is given to the Executive arm of government in Uganda?

9. What did the playing of the Uganda National Anthem on 9th October, 1962 mean to Uganda?

10. Give **one** reason why some rift valley lakes have fresh water.

11. Name **one** way through which Uganda government spends the revenue.
-
12. Give the main reason why Game Rangers move with guns in national Game Parks?
-
13. Mention any **one** way a community promotes its culture.
-
14. Name the organization that African Union replaced.
-
15. What is citizenship by Descent?
-
16. Which organization unites all independent former colonies and protectorates of Britain?
-
17. Why is it important to revive the Uganda Railways?
-
18. State any **one** way in which the Local Council 1 court is important in a village.
-
19. In the Space below, draw Uganda's main symbol of identity.



20. How did H.M. Stanley contribute to the coming of missionaries to Uganda?
-
21. Give any **one** service being provided by National Forest Authority.
-
22. Give any **one** economic importance of the source of River Nile apart from attracting tourism.
-
23. Give **one** reason why a home needs a budget.
-
24. Mention **one** way how human rights are violated.
-
25. What name is given to the part of the Nile at Pakwach?
-
26. Give **one** effect of the coming of the River-Lake Nilotes to Bunyoro Kingdom.
-
27. State **one** major cause of famine in Uganda.
-
28. What is population distribution?
-
29. Give **one** reason why the construction of road is difficult in Kapchorwa district?
-
30. Why are decrees important to the people of a district?
-

31. Give any one benefit that a person enjoys by being a citizen of Uganda.

32. Why is it proper to harvest crops during a dry season?

33. Give any one way in which order is kept in your class.

34. How can a wind vane be placed in order to get the correct direction of wind?

35. Why do tourists like to visit National Game Parks?

In questions 36-40, answer either Christianity Or Islam but not both in the same number

36. **Either:** Mention What is the importance of a cross as a symbol of Christianity?

OR: What is the importance of circumcision in Islam?

37. **Either:** Why does a Christian ask for forgiveness from God?

OR: Why does a Muslim ask for forgiveness from Allah?

38. **Either:** Give **one** reason why God made Sabbath a day of resting?

OR: What is the importance of Friday to a Muslim?

39. **Either:** How is death useful to a good Christian?

OR: In which way is death useful to a good Muslim?

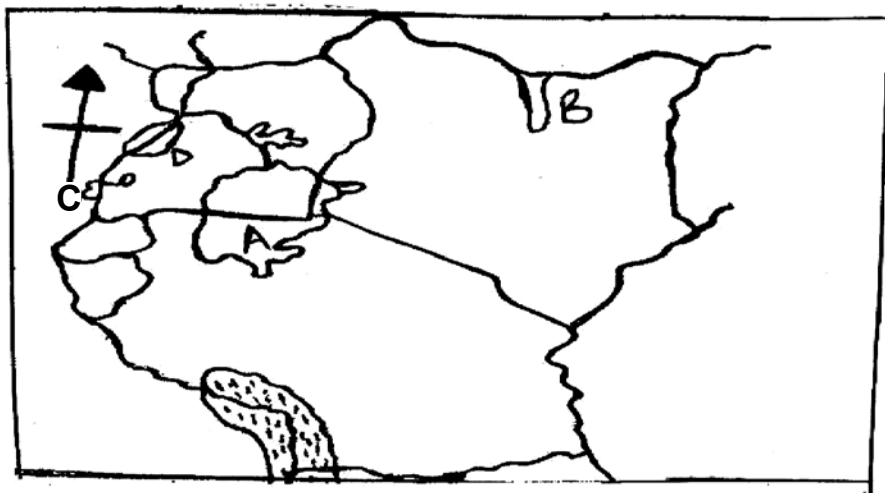
40. **Either:** How long did God take to create the universe?

OR: How long did Allah take to creat the Universe?

SECTION B

Questions 41-55 carry four marks each

41. Use the map of East Africa given below to answer question



a) Name the lake marked C

b) What compass direction is Lake B from Lake A?

c) Give any **one** problem faced by people living on Islands in Lake A.

d) Mention the main economic activity carried out in area D

42. a) Give **two** factors that have enabled irrigation to be done at Gezira Irrigation Scheme.

i. _____ ii. _____

b) Mention any **one** problem faced by cotton farmers on Gezira Irrigation Scheme.

c) Give any **one** advantage of growing crops by irrigation.

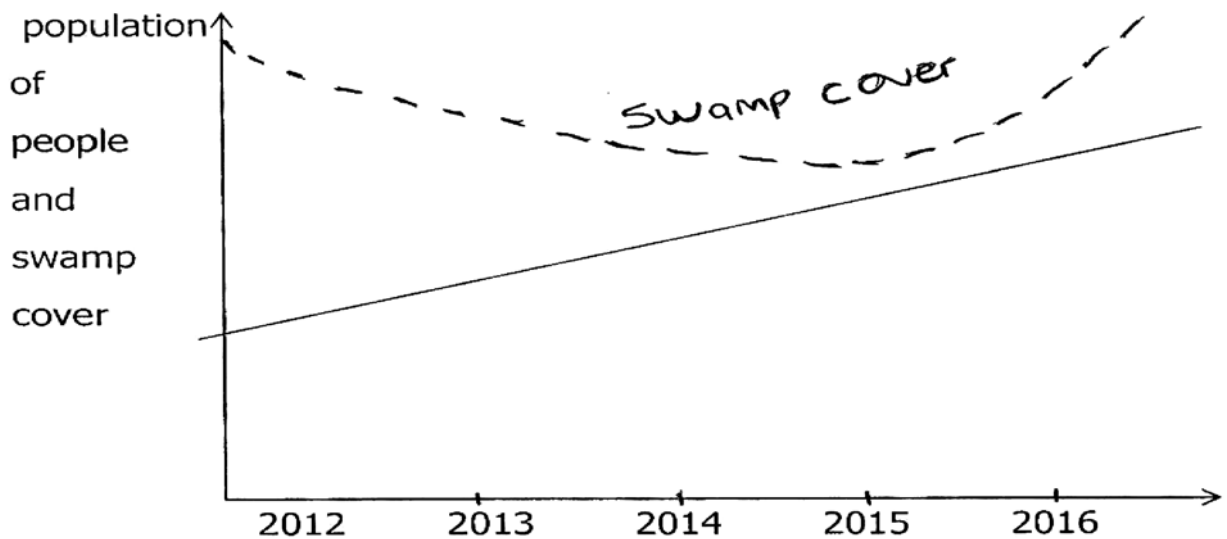
43. Name the United Nation Agency responsible for refugees.

b) Give two ways refugees benefit from the above named agency in (43a)

ii. _____ ii. _____

c) Mention the main cause of refugees in Africa.

44. a) The graph below shows the variation between population of people and swamp cover. Study it carefully and answer 44.



a) How did the increase in population of people affect the swamp cover between 2012 and 2014?

b) From 2016 what happened to the swamp cover?

c) Give a reason for the swamp cover as shown in 2012.

d) Mention any one way of conserving swamps.

45. **Match the personalities in list A with their contributions in list B correctly.**

List A

- i. Johann Ludwig Krapf
- ii. Johann Rebman
- iii. Jacob Erhardt
- iv. H.M. Stanley

List B

- met Dr. David Livingstone at Ujiji.
- wrote Swahili dictionary.
- was the first European to see Mt. Kilimanjaro.
- Attempted to draw the map of East Africa between the coast and the Great Lakes.

- i) Johann Ludwig Krapf

- ii) Johann Rebman

- iii) Jacob Erhardt

- iv) H.M. Stanely

46. What title is given to the person representing the President at s district?

- b) Give **two** roles played by the person mentioned above.

- i) _____

- ii) _____

- c) Mention **one** reason why the government has created many districts.

47. Give any **one** type of a leader apart from political leaders.

b) Mention **one** way through which a person becomes a political leader.

c) State any two examples of political leaders.

i) _____

ii) _____

48. a) What is rural –rural migration?

b) State **three** reasons for rural - rural migration.

i) _____

ii) _____

iii) _____

49. State **one** way in which rainfall distribution influence the vegetation cover of an area.

b) Name the vegetation cover that is distributed in most parts of Uganda.

c) Mention any **two** ways in which vegetation influence human activities.

i) _____

ii) _____

50. Give **two** methods of fishing.

i) _____

ii) _____

b) Mention any **two** importance

i) _____

ii) _____

FOR EACH OF THE QUESTIONS 51 – 54 ANSWER EITHER THE CHRISTIAN OR ISLAMIC QUESTIONS BUT NOT BOTH

51. Either: a) What is Holy Matrimony?

b) State any two reasons why Holy Matrimony is important to Christians

i) _____

ii) _____

c) Mention any one gift God gives to Christians who have received Holy Matrimony.

OR: a) What is Nikah in Islam?

b) Give **two** reasons why Nikah is important.

i) _____

ii) _____

c) Mention any **one** gift Allah gives to married people

52. a) **Either: “I do not know the person you are talking about....”**

a) Who said these words?

b) Where did he say these words from?

c) Who was being denied in the story?

d) As a Christian, what do you learn from this Bible story?

OR Write down **four** pillars of faith in Islam

i) _____

ii) _____

iii) _____

iv) _____

53. a) **Either:** Which son of Adam was killed by his brother?

b) Why was the son of Adam named in (53a) above killed (Give **two** reasons)

i) _____

ii) _____

c) Give any **one** way in which God punishes sinners.

OR: Give any **four** things which a person who is fasting is advised to do by the Prophet Muhammad (P.B.U.H)

i) _____

ii) _____

iii) _____

iv) _____

54. **Either:** What does wine represent in Holy Communion?

b) Give any **three** things which Christians request from God through the Lord's prayer.

i) _____

ii) _____

iii) _____

OR: a) Why do Muslims wash their feet before prayers?

b) Give **three** reasons why Muslims pray.

i) _____

ii) _____

iii) _____

55. **This question is to be answered by all candidates.**

a) Give four reasons why Christians and Muslims fast.

i) _____

ii) _____

iii) _____

iv) _____